



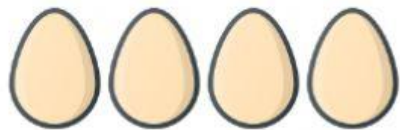



Choose the right option



Solve the addition problem and compare the numbers

$$4 + 2 = \square \text{ ————— } \boxed{6}$$

$$3 + 5 = \square \text{ ————— } \boxed{9}$$

$$1 + 3 = \square \text{ ————— } \boxed{5}$$

$$6 + 1 = \square \text{ ————— } \boxed{7}$$

$$7 + 3 = \square \text{ ————— } \boxed{10}$$

$$8 + 0 = \square \text{ ————— } \boxed{8}$$