

FEBRUARY							
MO	TU	WE	TH	FR	SA	SU	
	1	2	3	4	5	6	
7	8	9	10	11	12	13	
14	15	16	17	18	19	20	
21	22	23	24	25	26	27	
28							

MARCH							
MO	TU	WE	TH	FR	SA	SU	
	1	2	3	4	5	6	
7	8	9	10	11	12	13	
14	15	16	17	18	19	20	
21	22	23	24	25	26	27	
28	29	30	31				

APRIL							
MO	TU	WE	TH	FR	SA	SU	
				1	2	3	
4	5	6	7	8	9	10	
11	12	13	14	15	16	17	
18	19	20	21	22	23	24	
25	26	27	28	29	30		

- A. How many days are between 18th of February and 5th of March?
- B. What is the date two weeks after 11th of March?
- C. My dad's birthday is the 4th of April, what day is it?
- D. Your mum wants you to book your flight 14 days before you travel. If you're leaving on the 21st of March, which day should you buy the ticket?
- E. Kate was born on the 16th of June 2003. How old will she be on her birthday in 2022?

F. Jack's holiday is from the 1st of February to the 15th of February. Jill's holiday is from the 2nd of February to the 9th of February. Whose holiday is longer?


Maths	Science	Art	Music	Games	Literacy
9 – 10 a.m.	10 – 10.45 a.m.	11 – 11.30 a.m.	12 – 12.30 p.m.	1 – 2.15 p.m.	2.30 – 3.15 p.m.

Look at the timetable:


1. Which lesson is the longest?
2. How long is the longest lesson?
3. Which lesson is the shortest?
4. How long is the shortest lesson?

What time is it?



1.




2.



3.



5.



6.

