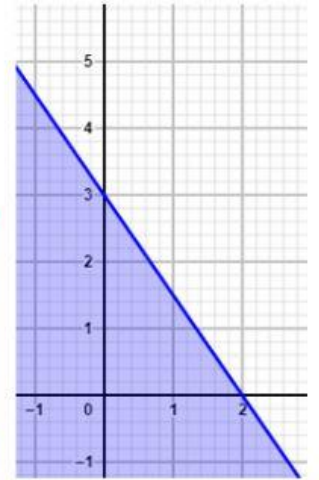
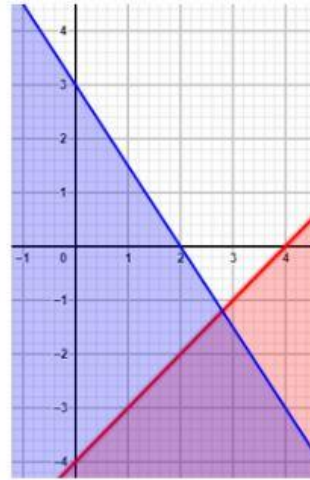
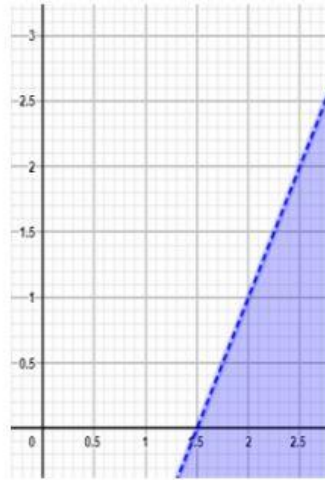
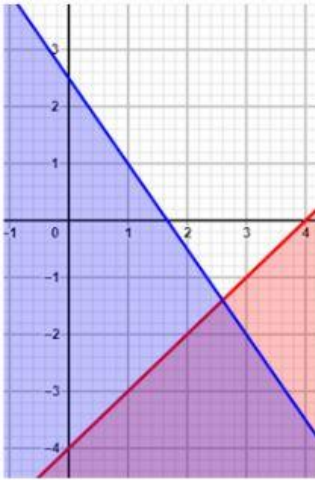


Demostramos lo aprendido

3. Hallar la gráfica de:

$$\begin{cases} x - y \geq 4 \\ 3x + 2y \leq 6 \end{cases}$$

Sugerencia: Aplique GeoGebra



Lic. Angel Maidana Cuadros