

LIVEWORKSHEET

OER Training (March 24, 25, 31-April 1, 2022)

BINCUL ELEMENTARY SCHOOL


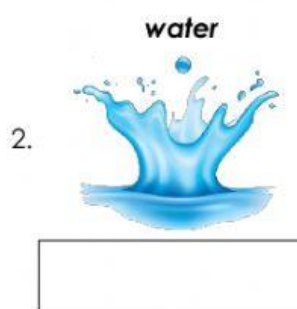
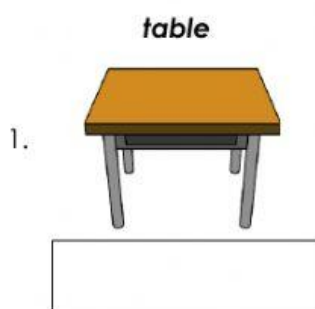
Test I. Fill in the Blanks

Directions: Fill in the blanks with the correct answer. Type your answers on a blank.

Particles or atom/ molecule, gas, definite Matter is made of tiny (1) _____. It has three states; solid, liquid and (2) _____. Solid particles have (3) _____ shape and volume.

Test II. Identification

Directions: Identify the state of matter of the following picture.



Test III. True or False

Directions: Click the box to put a check mark if the statement is true about matter and leave it blank if false.

- ☐ 1. The chemical make up food often changes when you cook it.
- ☐ 2. Electrons are larger than molecules.
- ☐ 3. Molecules can have atoms from more than one chemical element.

Test IV. Word Search

Directions: Find and click all the direction words that are hidden in the grid.

| | | | | | |
|---|---|---|---|---|---|
| S | O | L | I | D | Z |
| Y | W | I | X | U | E |
| T | R | Q | Q | E | Q |
| H | L | U | G | A | S |
| S | G | I | W | S | W |
| A | Z | D | B | X | K |

SOLID

LIQUID

GAS

Prepared by:

BRYNER R. PAYOPELIN

ICT Coordinator, Bincul ES