

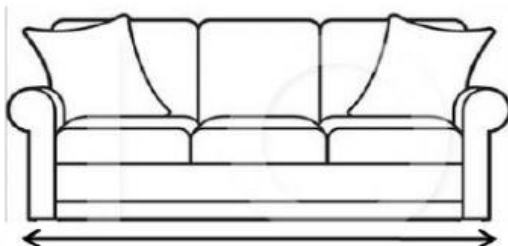
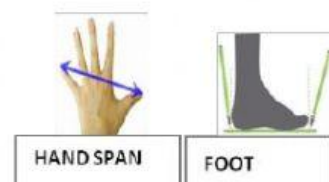
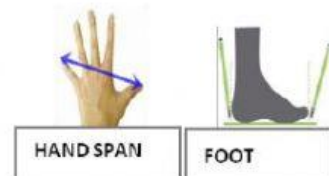
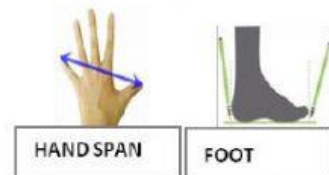
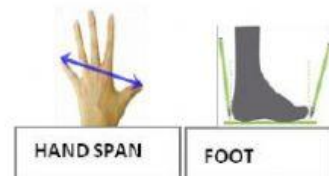


Name -

Phase 1- Foundation Numeracy
Class Worksheet -12


Stage-	Progressing	Grade-	2
Conceptual Area -	Measurement	Topic-	Comparing and measuring length

A. Which unit is most suitable to measure the following objects? Select the right choice (Handspan/Foot).




B. Observe the lengths of these lines


1




2



3



4



_____ line is longest

_____ line is shortest

C. Arrange the objects in ascending order of height. Number 1 for shortest and 5 for tallest

