





<b>Name -</b>			
<b>Phase 1- Foundation Numeracy</b> <b>Class Worksheet -15</b>			
Stage-	Proficient	Grade-	3
Conceptual Area -	Operations on Number System	Topic-	Concept of remainder

- A. Ram's mother got 27 cakes for his birthday. She gave 2 cakes to each child. How many cakes are left? Colour them.




- B. Divide the dots into groups and write the quotient and remainder.

a. Divide into groups of 3  
 $20 \div 3 = 6$      




R = 2

b. Divide into groups of 9  
 $20 \div 9 =$      




R =     

c. Divide into groups of 6  
 $21 \div 6 =$      




R =     

d. Divide into groups of 5  
 $26 \div 5 =$      




R =     

e. Divide into groups of 7  
 $20 \div 7 =$      



R =     

f. Divide into groups of 2  
 $21 \div 2 =$      



R =

C. Match Column A to Column B

	COLUMN A	COLUMN B
a.	$200 \div 200$	9
b.	$100 \div 1$	80
c.	$18 \div 2$	1
d.	$800 \div 10$	0
e.	$0 \div 1000$	100

D. Read each word problem carefully and solve it.

- a. Ram takes 10 minutes to walk around the park. How many rounds can he take in 60 minutes?



- b. Lucky bought 50 cupcakes for his birthday party. There are 5 cupcakes in each pack. How many packs of cupcakes did he buy?



- c. Mother had 12 carrots. She gave the carrots to Ria and Sia to grate. How many carrots did each girl grate?

