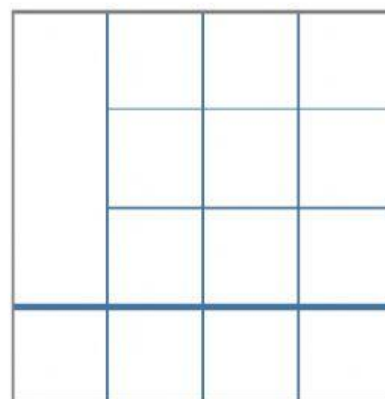
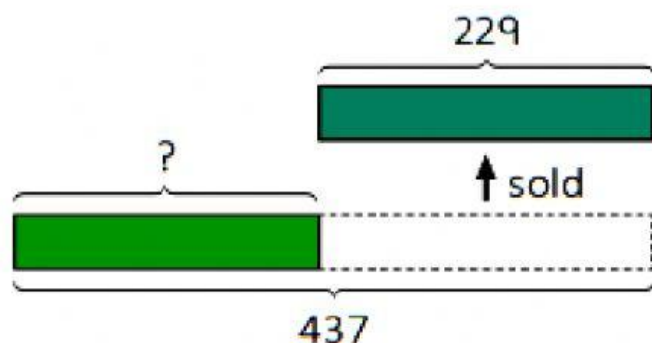


Taking away one set

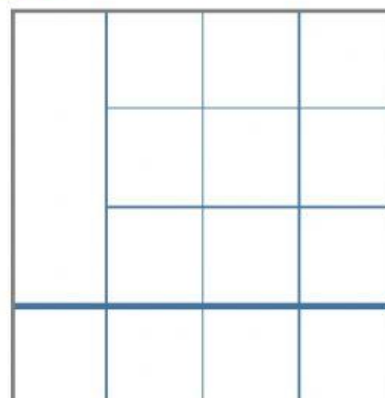
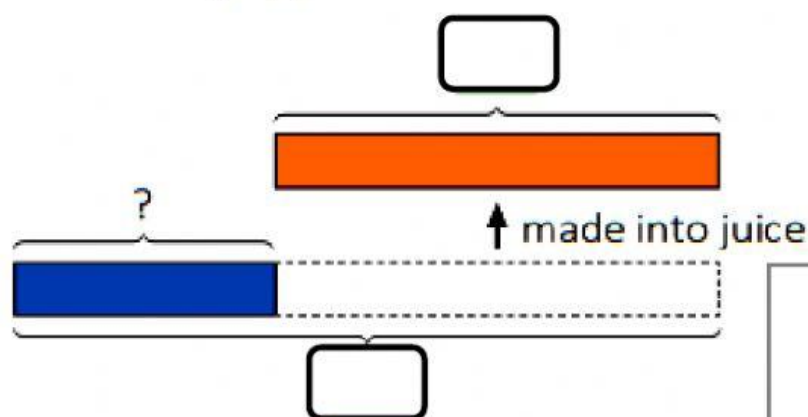
- 5 There were 437 doughnuts at a bakery.
229 of them were sold.
How many doughnuts were left?



$$437 - 229 = 208$$

208 doughnuts were left.

- 6 Ali picks 649 apples from his farm.
He uses 412 of them to make juice.
How many apples does Ali have left?



$$\square - \square = \square$$

Ali has apples left.