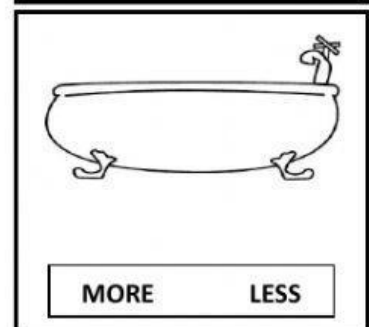
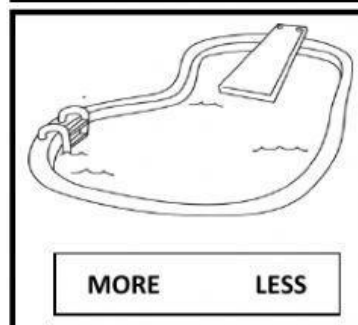
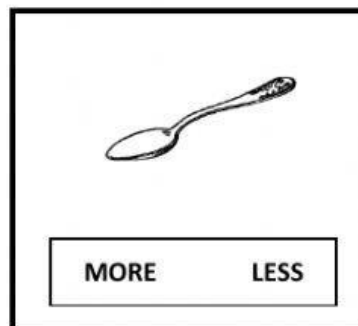



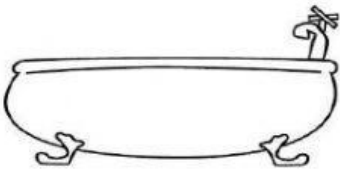
Name -			
Phase 1- Foundation Numeracy Class Worksheet -18			
Stage-	Proficient	Grade-	3
Conceptual Area -	Measurement	Topic-	Comparing and measuring Volume/Capacity in units

A. Circle MORE or LESS depending upon if it's more or less than 1 litre.

These
have a
capacity
of 1 Litre



B. Which unit of capacity (litres or millilitres) would you use to measure the liquid in these containers?




A bath tub

Litres
Millilitres




A tea cup

Litres
Millilitres




A Jug

Litres
Millilitres




A watering can

Litres
Millilitres



Perfume bottle

Litres
Millilitres



A can of coke

Litres
Millilitres

C. Draw a circle around the object which holds more than 1 Litre.

