



UNIT 10: Integer numbers

Lesson 1: Number line

I. Basic knowledge

II. Vocabulary

English words	Vietnamese meaning
Integer number	Số nguyên
Positive number	Số nguyên dương
Negative number	Số nguyên âm
Opposite numbers	Số đối
Number line	Trục số

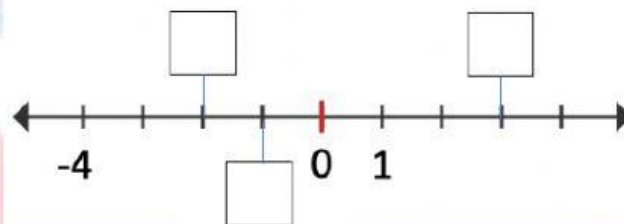
III. Practice

1. Write the *opposite numbers* for the numbers below.

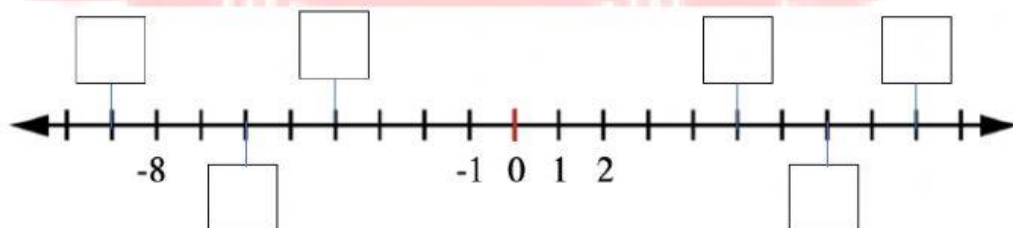
- a. 5 b. -13
- c. 9 d. -25

2. Complete the number line

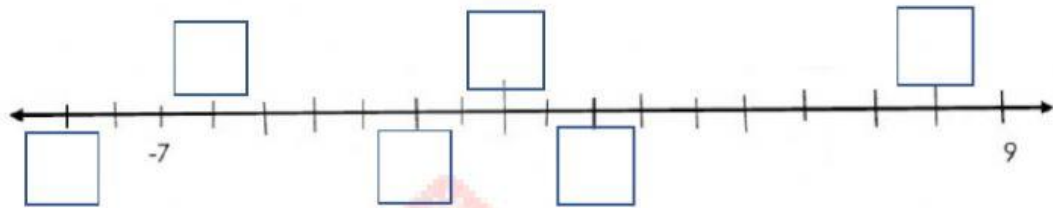
a.



b.



3. Label these integers on the number line below: -6 ; 8 ; -9 ; 0 ; 2 ; -2



4. Choose the correct answer.

- a. On a number line, negative numbers are located (*left/ right*) _____ of zero.
- b. On a number line, positive numbers are located (*left/ right*) _____ of zero.
- c. On a number line, -5 would be located (*left/right*) _____ of 4 .
- d. On a number line, -10 would be located (*left/ right*) _____ of -7 .

