



DREAM CREATORZ ACADEMY SCHOOL

INFANT 1

END OF TERM 2 TEST

**FILL IN ALL INFORMATION REQUESTED CLEARLY**

STUDENT'S NAME \_\_\_\_\_

DATE: \_\_\_\_\_

CLASS: INFANT 1

SCHOOL: DREAM CREATORZ ACADEMY

Total Marks=

Score \_\_\_\_\_

**SUBJECT- MATHEMATICS**

**TIME: 60 MINUTES**

**READ THE FOLLOWING DIRECTIONS CAREFULLY**

1. This test has 10 test items.
2. Ensure you listen to the instructions before you start to work on any item.
3. Do not begin until you are told to do so.



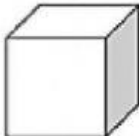




1. Match the number to its word name.

4mks

9	ten
1	five
10	one
5	nine

2. Match the 3D shapes to its name.

4mks

	Sphere
	Cone
	Cube
	Cylinder
	Cuboid



3. Select the object that resembles a sphere.

1mk



4. Count how many and select the number.

1mk




5. Select the lightest object.

1mk



6. Select the heavier object.

1mk





7. Sort the shapes in the table below.

9mks



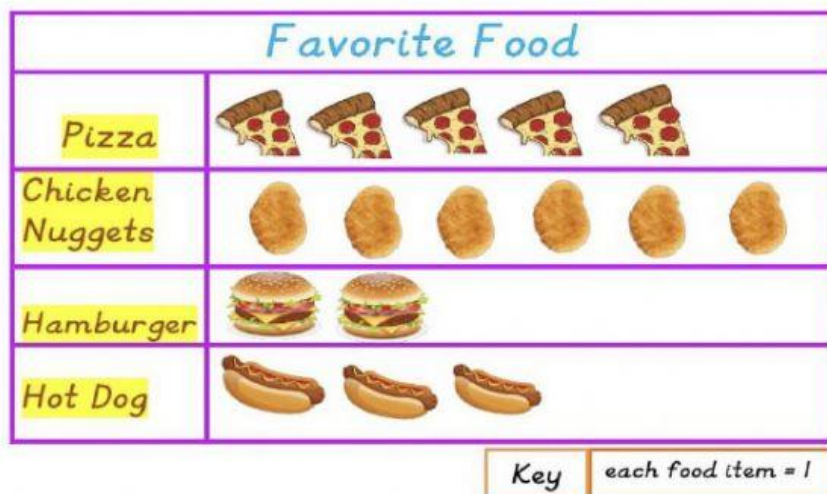
Square	Triangle	Circle



Questions 8-12 are based on the pictograph below.

5mks

The pictograph shows the students favourite foods. Use the graph to answer the questions below.



8. How many students like hamburger? \_\_\_\_\_
9. How many students like hotdog? \_\_\_\_\_
10. Which food item is the favourite? \_\_\_\_\_
11. What is the title of the graph? \_\_\_\_\_
12. How many students voted altogether? \_\_\_\_\_

All the best in your Exam!