









Read the directions below to follow the map. Then answer each question.

 Bakery			 Hospital			
		 Park				 Pet Shop
				 Toyshop TOY SHOP		
 Pool		Start 			 School	

1. Start. Move forward 2 squares. Where are you? _____
2. Start. Move forward 1 square. Make $\frac{1}{4}$ turn clockwise. Move forward 2 squares. Where are you? _____
3. Start. Move Forward 3 squares. Make $\frac{1}{4}$ turn clockwise. Move forward 1 square. Where are you? _____
4. Start. Move forward 2 squares. Make $\frac{1}{4}$ turn anti-clockwise. Move forward 2 squares. Make $\frac{1}{4}$ turn clockwise. Move forward 1 square. Where are you? _____
5. Start. Move forward 3 squares. Make $\frac{1}{4}$ turn clockwise. Move forward 3 squares. Make $\frac{1}{4}$ turn clockwise. Move forward 3 squares. Where are you? _____

Key Words

Bakery
Pool
Hospital
Park
Pet shop
Toy shop
School