





Name -			
Phase 1– Foundation Numeracy Class Worksheet -31			
Stage-	Beginner	Grade-	1
Conceptual Area -	Geometry	Topic-	Identifying space- top, bottom, under, inside, outside etc.

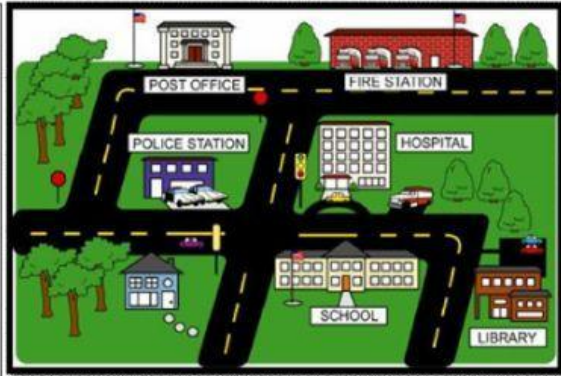
A. Where is the boy? Use words from the box below to find the position.

IN	ON	OVER	UNDER	BEHIND	BESIDE
----	----	------	-------	--------	--------




B. Look at the map and fill up the blanks using near or far

- The Police station is _____ the school.
- The Library is _____ from the Post office.
- The traffic signal is _____ the hospital.
- Fire station is _____ from the house.




C. Compare the sizes of vegetables; write 1 under small size, 2 under medium size and 3 under big size.





D. Look at the picture and answer the questions.



- | | |
|--|-------|
| a. How many apples are behind the tree? | _____ |
| b. How many apples are in front of the tree? | _____ |
| c. How many apples are on the tree? | _____ |
| d. How many apples are under the tree? | _____ |