








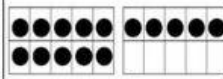
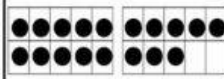

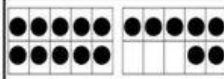
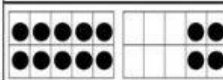
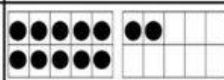
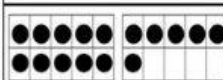

1. Em hãy nhìn hình, đếm và viết số vào ô trống:

	<input type="text" value="12"/>
	<input type="text"/>
	<input type="text"/>
	<input type="text"/>
	<input type="text"/>

2. Đếm, viết số còn thiếu vào mã con gà:

3. Em chọn số nào ?

	
<input type="radio"/> 14	<input type="radio"/> 18
<input type="radio"/> 15	<input type="radio"/> 19
	
<input type="radio"/> 14	<input type="radio"/> 12
<input type="radio"/> 13	<input type="radio"/> 16
	
<input type="radio"/> 13	<input type="radio"/> 12
<input type="radio"/> 14	<input type="radio"/> 20
	
<input type="radio"/> 10	<input type="radio"/> 17
<input type="radio"/> 16	<input type="radio"/> 18
<input type="radio"/> 20	<input type="radio"/> 19