

Name: \_\_\_\_\_

Year 2 Bijak

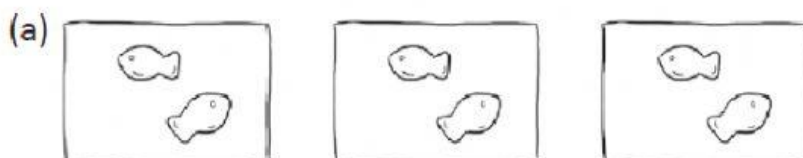
Wednesday

23<sup>rd</sup> March 2022

Chapter 4 - Multiplication and Division

**Topic: Division-Equal sharing**

1. Look at the packets of fish crackers.  
Then, fill in the blanks.




There are \_\_\_\_\_ fish crackers altogether.

How many fish crackers are in each packet?

\_\_\_\_\_

- 2.) Look at the picture.  
Then, fill in the blanks.



There are \_\_\_\_\_ cats altogether.

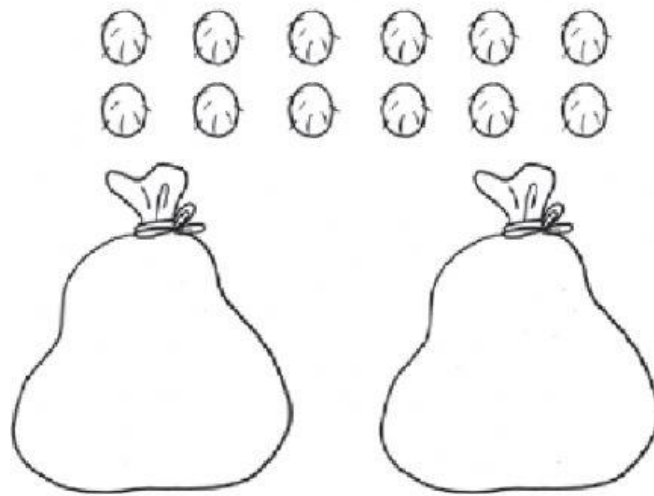
There are \_\_\_\_\_ baskets.

There are \_\_\_\_\_ cats in each basket.

3.)

(a) There are 12 rambutans.

Draw an equal number of rambutans in each bag.



Drag the rambutans inside the bag.

There are \_\_\_\_\_ rambutans in each bag.

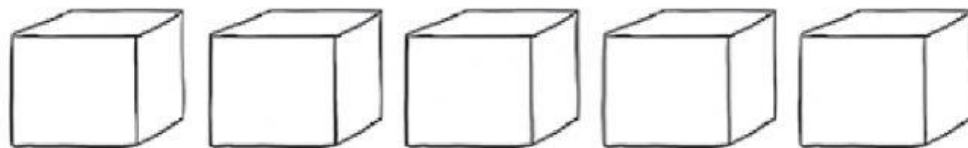
(b) There are 15 toy cars.

Ahmad packs them into 5 boxes equally.

How many toy cars are there in each box?



Drag the toy cars inside the box.



There are \_\_\_\_\_ toy cars in each box.