

NAME: \_\_\_\_\_

YEAR 3: A / B

### SECTION A

Choose the correct answer and write the answer in the box provided.

1. A mango tree is \_\_\_\_\_ plants.

- A. Big
- B. Short
- C. Tall

2. Plants that produce flowers are called \_\_\_\_\_.

- A. Flowering plants.
- B. Non-flowering plants
- C. Tall plants

3. Parrot and Eagle use their \_\_\_\_\_ to fly.

- A. Legs
- B. Wings
- C. Body

4. All \_\_\_\_\_ needs food and water to live.

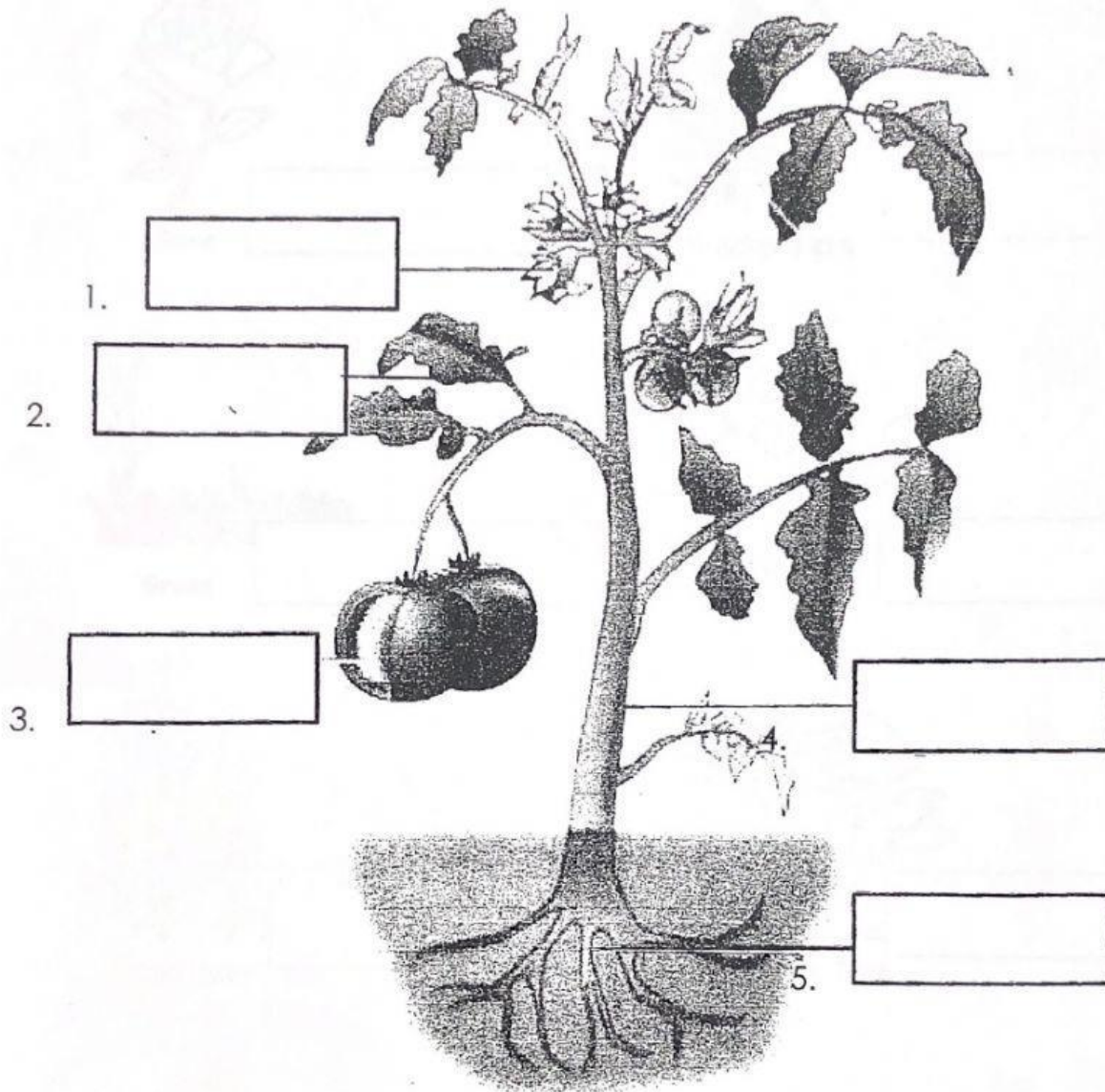
- A. Non-living things
- B. Living things
- C. Stationaries

5. Which one of the following is a non-living thing?

- A. A car
- B. Giraffe
- C. Roses

C. Fill in the box with the correct answer provided.

Roots	flower	fruits	stem	leaf
-------	--------	--------	------	------



## SECTION B

Write the correct answer below.

Flowering Plants


Non-Flowering Plants




Rose




Bracken Fern




Grass



Tulips



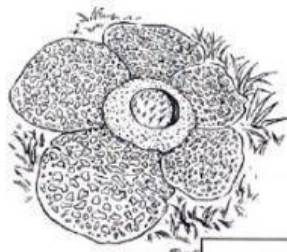
Sunflower



Oak Tree



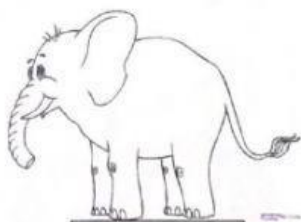
Pine Tree




Rafflesia

## SECTION D


Group the animals correctly.




Elephant



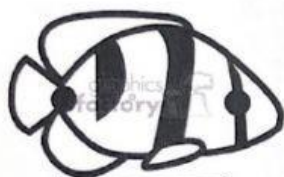
Shark




Lion




Octopus



Clown fish



Cat



Crocodile



Giraffe



Crab




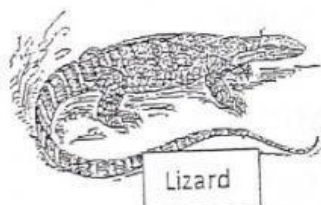




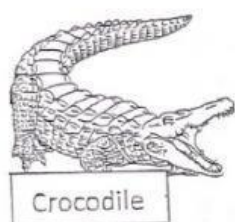




Chicken

Live on land	Live in the water
1. _____	6. _____
2. _____	7. _____
3. _____	8. _____
4. _____	9. _____
5. _____	10. _____

(10 marks)



1/ Classify the animals below into the correct box.



Furs	Feathers	Scales
1.	5.	9.
2.	6.	10.
3.	7.	11.
4.	8.	12.