



Name :	Score :
Class :	
Day and Date :	Parent's Signature :
Grade /Semester: 1 /Semester 2 Learning Session : 9	Subject: Math Topic : Measuring weight

Bismillahirrahmanirrahim

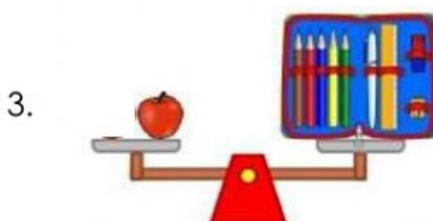
I. Count the mass of each object and write the number of units.




The mass of the book is _____ units.



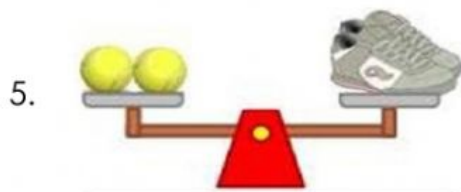
The mass of the lamp is _____ units.



The mass of the pencil case is _____ units.



The mass of the jug is _____ units.



The mass of the shoe is _____ units.

II. Compare the object. Write heavier, lighter, heaviest or lightest.

1. The jug is _____ than the lamp.
2. The book is _____ than the shoe.
3. The pencil case is _____ than the shoe.
4. The lamp is the _____
5. The pencil case is the _____

Alhamdulillahirabbil 'alamin