



Name: .....


Class: ..... Date: ..... / ..... / 2022

# WORKSHEET - MATHS

## Week 30 – Equal sharing

Teacher's comments:.....


Exercise 1: Write the division sentence and answer the questions.



$$\underline{\quad} \div \underline{\quad} = \underline{\quad}$$

How many bananas does each kid get?

\_\_\_\_\_ bananas



$$\underline{\quad} \div \underline{\quad} = \underline{\quad}$$

How many muffins does each kid get?

\_\_\_\_\_ muffins



$$\underline{\quad} \div \underline{\quad} = \underline{\quad}$$

How many pretzels does each kid get?

\_\_\_\_\_ pretzels



$$\underline{\quad} \div \underline{\quad} = \underline{\quad}$$

How many cherries does each kid get?

\_\_\_\_\_ cherries

Exercise 2: Read the words and write the division sentence.

a. fourteen divided by two equals seven

$$\boxed{\quad} \div \boxed{\quad} = \boxed{\quad}$$


b. Twelve divided by four equals three

$$\boxed{\phantom{00}} \div \boxed{\phantom{00}} = \boxed{\phantom{00}}$$

c. Fifteen divided by three is equal to five


$$\boxed{\phantom{00}} \div \boxed{\phantom{00}} = \boxed{\phantom{00}}$$

**Exercise 3: Fill in the blanks. (Only write the number)**




How many groups of 2 are there?

\_\_\_\_\_



How many groups of 3 are there?

\_\_\_\_\_



How many groups of 4 are there?

\_\_\_\_\_




How many groups of 5 are there?

\_\_\_\_\_



How many groups of 4 are there?

\_\_\_\_\_



How many groups of 3 are there?

\_\_\_\_\_