


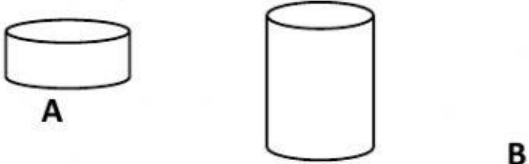



NEW GRANT ST. (MATTHEW'S) ANGLICAN SCHOOL
STANDARD ONE

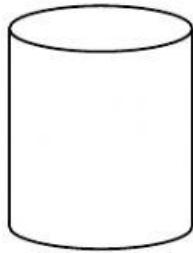
NO.	TEST ITEMS
1.	<p>Write the word name for the number 60.</p> <p>Answer _____</p>
2.	<p>The number cards below are ordered from largest to smallest.</p> <div data-bbox="359 638 774 694"><div>93</div><div>70</div><div></div><div>55</div></div> <p>Which number below goes in the empty card?</p> <p>48 64 21 105</p> <p>Answer _____</p>
3.	<p>Joy has two bars of chocolate.</p> <div data-bbox="359 1097 970 1198"><div><div></div><div></div></div><div><div></div><div></div></div></div> <p>Bar A Bar B</p> <p>Which bar has an odd number of blocks of chocolate?</p> <p>Answer _____</p>

NEW GRANT ST. (MATTHEW'S) ANGLICAN SCHOOL
STANDARD ONE

NO.	TEST ITEMS
4.	<p>Find the sum of 10 and 80.</p> <p>Answer_____</p>
5.	<p>Nicholas had 17 marbles. He lost 8 marbles.</p> <p>How many marbles does he have now?</p> <p>Answer_____</p>
6.	<p>Complete the number pattern below.</p> <p>10, 15, 20, _____.</p>
7.	<p>Ravi picked mangoes from the tree in his yard. His mangoes are show below.</p>  <p>a) How many mangoes did Ravi pick?</p> <p>Answer_____</p> <p>b) Ravi shared his mangoes equally among his 2 friends. How many mangoes did each friend get?</p> <p>Answer_____</p>

8.	<p>There are 3 children at a birthday party. Each child is given two cupcakes.</p>  <p>How many cupcakes did the children receive altogether?</p> <p>Answer _____</p>
9	<p>Aliya is measuring the length of her notebook using paperclips. How long is here notebook below</p>  <p>Aliya's notebook is _____ paperclips long.</p>
10.	<p>How many of container A is needed to fill container B?</p>  <p>Answer _____</p>
13.	<p>Cross out the shape that can be used to make a cube.</p> 


14. Adele is cutting out plane shapes of paper to make a cylinder.



Circle the names of the plane shapes she must cut out.

Circle Rectangle Triangle

15. A pattern made with shapes is shown below.



- a) Select the missing shapes in the pattern
b) What is the 15th shape in the pattern?

16. The table below shows the number of books read by four students.

Name	Tally	Number of Books Read
Maya	IIII III	8
Suresh		10
Kim	III	3
Peter	IIII IIII I	

Complete the table.

17. The table below shows the favorite cartoons of a Standard 1 class.

Cartoon	Number of Students
Sponge Bob	9
Curious George	12
Peppa Pig	6

- a) Which cartoon is the most popular in the class?

Answer _____

- b) How many students did not choose Curious George as their favorite cartoon?

Answer _____