

Math Class Practice

III Quarter

1. Look at the picture and write the amount of money:

a. 




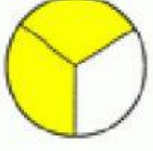



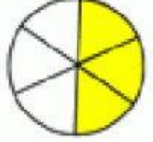
b. 

c. 

d. 

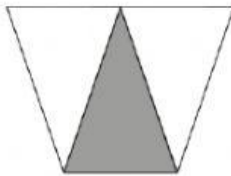
e. 

2. Look at the pictures and label them correctly.


	$\frac{1}{\square}$		$\frac{\square}{\square}$
	$\frac{\square}{6}$		$\frac{\square}{\square}$
	$\frac{\square}{\square}$		$\frac{\square}{\square}$
	$\frac{\square}{\square}$		$\frac{\square}{\square}$

3. Write the fractions for shaded parts.

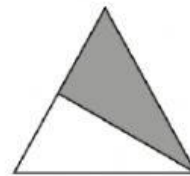
1.



2.

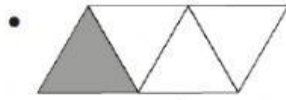


3.




4. Match the fractions correctly.

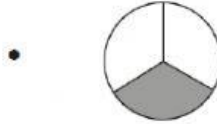
$\frac{1}{4}$ •



$\frac{1}{2}$ •



$\frac{2}{3}$ •



$\frac{1}{3}$ •












.....

$\frac{3}{4}$ •



5. Chose the correct length for each object:

<p>slide</p>  <p>a. 3 inches <input type="checkbox"/></p> <p>b. 3 yards <input type="checkbox"/></p> <p>c. 3 centimeters <input type="checkbox"/></p>	<p>toothbrush</p>  <p>a. 7 inches <input type="checkbox"/></p> <p>b. 15 inches <input type="checkbox"/></p> <p>c. 1 yard <input type="checkbox"/></p>	<p>acorn</p>  <p>a. 2 centimeters <input type="checkbox"/></p> <p>b. 20 centimeters <input type="checkbox"/></p> <p>c. 200 centimeters <input type="checkbox"/></p>
<p>needle</p>  <p>a. 14 inches <input type="checkbox"/></p> <p>b. 8 inches <input type="checkbox"/></p> <p>c. 2 inches <input type="checkbox"/></p>	<p>pencil</p>  <p>a. 15 centimeters <input type="checkbox"/></p> <p>b. 15 inches <input type="checkbox"/></p> <p>c. 15 meters <input type="checkbox"/></p>	<p>broom</p>  <p>a. 4 centimeters <input type="checkbox"/></p> <p>b. 4 meters <input type="checkbox"/></p> <p>c. 4 feet <input type="checkbox"/></p>
<p>comb</p>  <p>a. 3 yards <input type="checkbox"/></p> <p>b. 6 inches <input type="checkbox"/></p> <p>c. 2 meters <input type="checkbox"/></p>	<p>apple tree</p>  <p>a. 1 yard <input type="checkbox"/></p> <p>b. 10 yards <input type="checkbox"/></p> <p>c. 100 yards <input type="checkbox"/></p>	<p>student</p>  <p>a. 6 yards <input type="checkbox"/></p> <p>b. 5 inches <input type="checkbox"/></p> <p>c. 4 feet <input type="checkbox"/></p>