



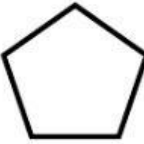
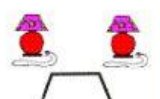

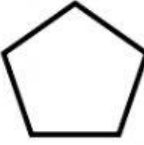


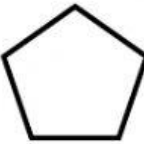


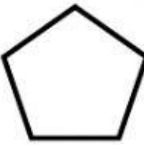


Name -

Phase 1- Foundation Numeracy
Class Worksheet -12

Stage-	Beginner	Grade-	1
Conceptual Area -	Operations on Number System	Topic-	Addition

I. Count and write the correct number and then add

 2	+	 2	=	
 2	+	 1	=	
 5	+	 2	=	
 4	+	 2	=	

II. Write the following using + symbol and fill up the blanks by adding. You can use dots or sticks to add if you find it difficult.

- a. 5 and 5 is _____
- b. 6 and 7 is _____
- c. 9 and 9 is _____
- d. 8 and 7 is _____
- e. 4 and 9 is _____
- f. 3 and 4 is _____
- g. 7 and 3 is _____
- h. 9 and 2 is _____
- i. 8 and 5 is _____