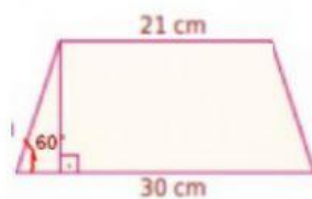
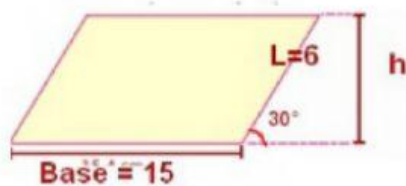
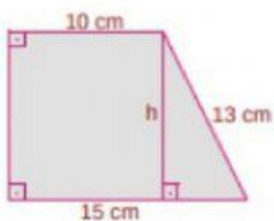
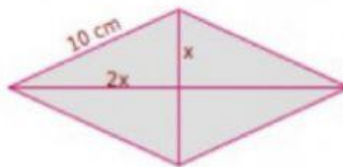
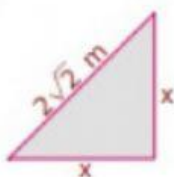


1- Encontre as áreas das figuras abaixo com o auxílio do seno, cosseno tangente e o teorema de Pitágoras:

Consulte a tabela abaixo, quando necessário.



Considere : raiz de 3 =1,7

	30°	45°	60°
seno	$1/2$	$\sqrt{2}/2$	$\sqrt{3}/2$
cosseno	$\sqrt{3}/2$	$\sqrt{2}/2$	$1/2$
tangente	$\sqrt{3}/3$	1	$\sqrt{3}$