
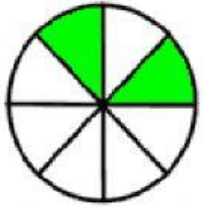
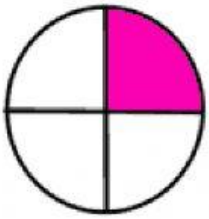


Unir con una línea, la grafica de la fracción con su representación numerica



$2/8$

$1/5$

$2/4$

$2/3$

$3/6$

$1/4$

$1/2$

$3/5$

$7/8$

$7/10$

