



nizamia andalusia school

Name :	Score :
Class :	
Day and Date :	Parent's Signature :
Grade / Semester : 3 / Semester 2 Week / Session : 12	Subject : Math Topic : Acute and Obtuse Angles

Bismillahirrahmanirrahim

I. Match the angles with the description.

Right angle

More than 90 degrees

Acute angle

Less than 90 degrees

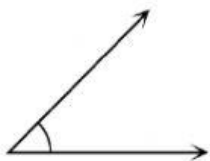
Obtuse angle

90 degrees

Angles on a straight line

180 degrees

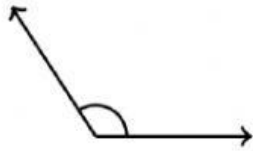
II. Draw cross (x) in the box for the angle with wrong name.



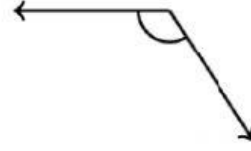
Acute angle



Right angle



Obtuse angle



Right angle

III. Look at the minute hand and hour hand.
Name the angles in between them.



a.



b.



c.



d.

Alhamdulillahirabbilalamin