

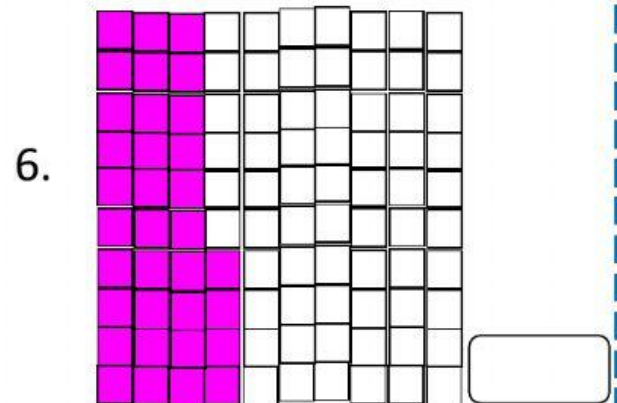
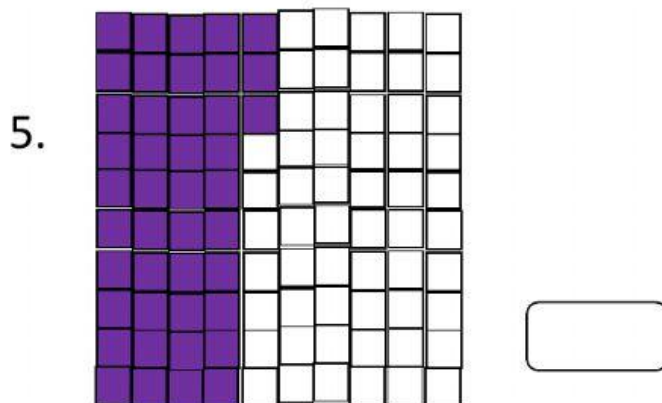
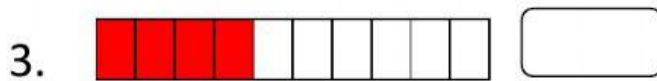


Name: \_\_\_\_\_

Date: \_\_\_\_\_

## Mathematics

### Decimals

Write the decimals shown below.



Write the decimal in Number Form.

7. six-tenths \_\_\_\_\_

8. nine-tenths \_\_\_\_\_

9. twenty-five hundredths \_\_\_\_\_

10. sixty-one hundredths \_\_\_\_\_