

Name: _____

Class: 2A1

Date: 3 / 2022

Grams and kilograms

Look at the fruit on the equal-arm scales. Finish the sentences below each picture to make the statement true using the words **heavier**, **lighter** or **equal**.



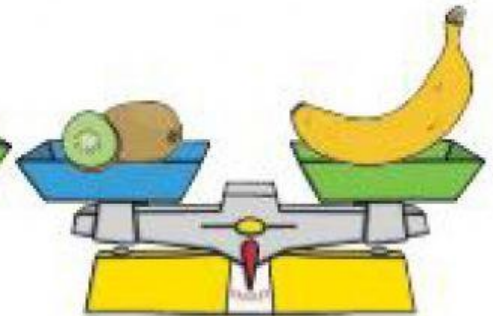
The apple is

than the pineapple.




The orange is

than the blueberries.



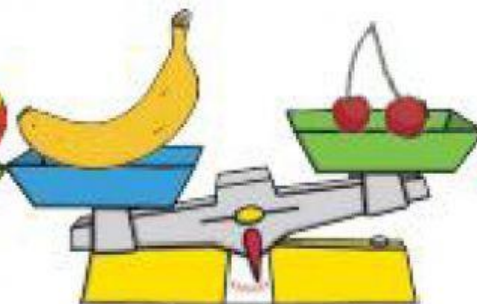
The kiwi fruit is

to the banana.



The strawberry is

than the mango.



The banana is

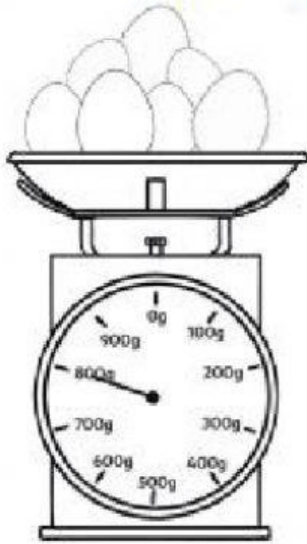
than the cherries.



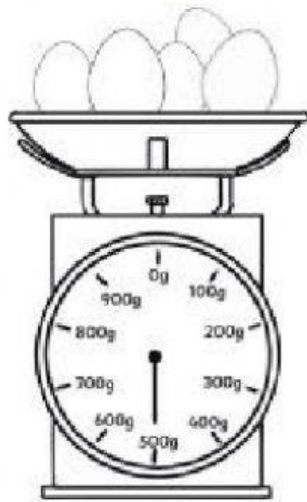
The orange is

to the apple.

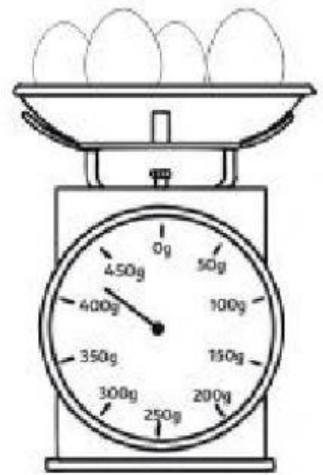
Read the scales of each Easter basket and record the weight.



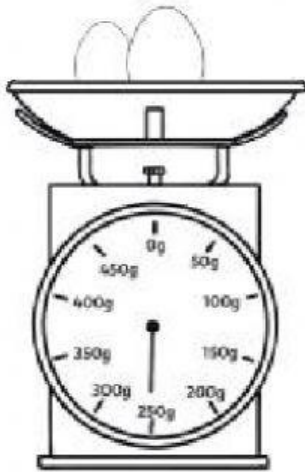
a. _____



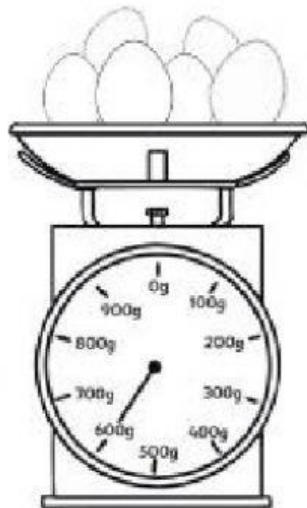
b. _____



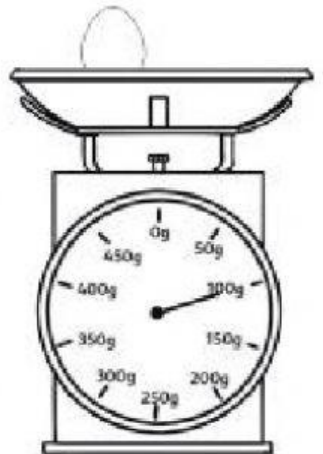
c. _____



d. _____



e. _____



f. _____



The lemon has a mass of 80g.

The strawberry has a mass of 70g.

What is the mass of the plum?

-> The plum has a mass of _____g.