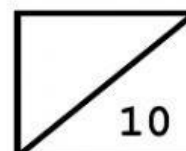


Stella's School
Year 5 – Mental Computation Test
Term 1 (Week 11)

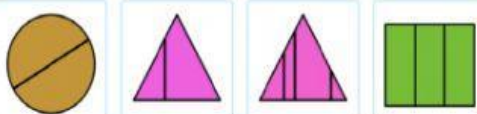



Name: _____

Year 5: _____

	QUESTION	ANSWER		QUESTION	ANSWER
1.	In 862 357, the digit 2 is in the _____ place.		10.	315 x 1000 = _____	
2.	What is the value of the digit 4 in 842 679? = _____.		11.	There are 30 tissues in each box. How many tissues are there in 10 boxes?	
3.	Round off to the nearest ten thousand. 5 600 239		12.	Multiply, 23 x 9 = _____	
4.	10 000 less than 800 246 is = _____		13.	Add, $\frac{1}{10} + \frac{2}{10}$	
5.	1 000 000 more than 900 321 is _____		14.	What is double of 52?	
6.	Which is smaller? 84 762 or 86 974.		15.	Write twenty and eighty-six hundredths	
7.	85 – 15 x 5 = _____		16.	$\frac{2}{6} + \frac{1}{3} + \frac{1}{6} =$ _____	
8.	Write in words. 5 630 400 _____		17.	What is the value of the underlined digit? 456 <u>9</u> 87	
9.	$\frac{5}{7} + \frac{1}{7} =$ _____		18.	36 ÷ 9 = _____	

Stella's School
Year 5 – Mental Computation Test
Term 1 (Week 11)

	QUESTION	ANSWER		QUESTION	ANSWER
19.	Find the missing numbers in the pattern. The rule is added 5. 250, _____, _____, 265.		25.	Express the fraction using division. $\frac{8}{12}$	_____ ÷ _____
20.	What is the 4 th multiple of 12?		26.	Which number is larger? 987 or 998	
21.	Select which shape that is equal parts. 		27.	$3 + 8 + 4 + 7 =$ _____	
22.	Compare the numbers. Use < or >. 1 999 000 _____ 9 000 111		28.	$81 \div 9 =$ _____	
23.	What time does the clock show? 		29.	$16 \div 4 \times 2 =$ _____	
24.	Round off 18 500 to the nearest thousand. _____		30.	$37 + 8 - 25 =$ _____	