

Name: _____

Year 1Bijak

Tuesday

15th March 2022

Chapter 6 - Addition and Subtraction within 20

Topic: Ways to add: Adding by making 10

- 1.) Make 10 first.
Then, add.


Example




$$6 + 8 = \underline{14}$$



$$7 + 4 = \underline{\hspace{2cm}}$$

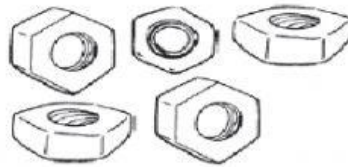
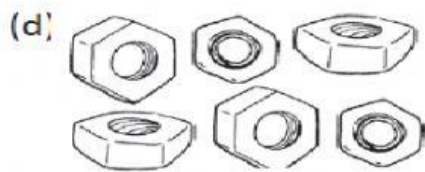


$$6 + 7 = \underline{\hspace{2cm}}$$





$$9 + 6 = \underline{\hspace{2cm}}$$



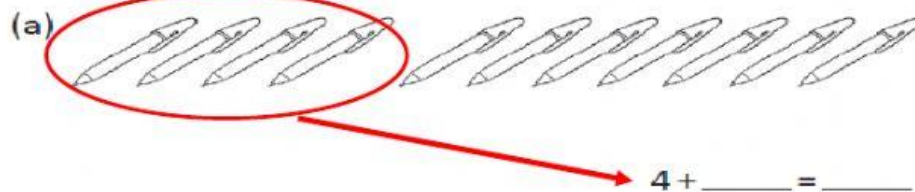


$$6 + 5 = \underline{\hspace{2cm}}$$




$$8 + 8 = \underline{\hspace{2cm}}$$

2. Complete the addition sentences.




$$4 + \underline{\hspace{2cm}} = \underline{\hspace{2cm}}$$



$$8 + \underline{\hspace{2cm}} = \underline{\hspace{2cm}}$$



$$7 + \underline{\hspace{2cm}} = \underline{\hspace{2cm}}$$



$$5 + \underline{\hspace{2cm}} = \underline{\hspace{2cm}}$$