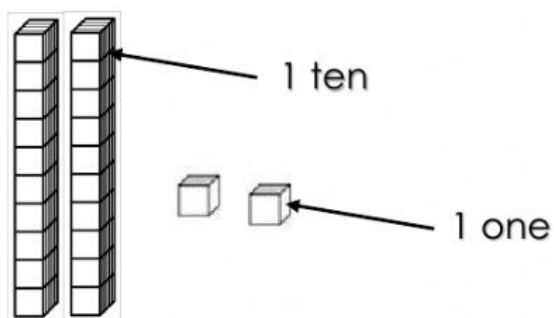


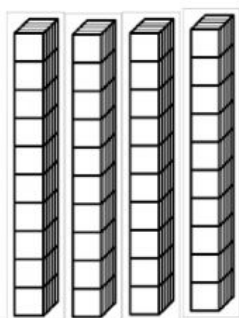
Tens and Ones

Look at the pictures. Write how many tens and ones or write the number.



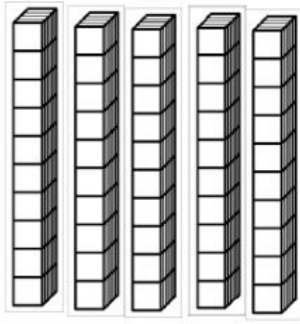
2 tens and 2 ones =

T	O



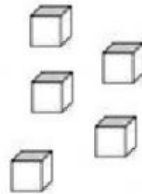
____ tens and ____ ones =

T	O
40	



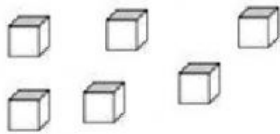
_____ tens and _____ ones =

T O
53



1 ten and 7 ones =

T O



_____ tens and _____ ones =

T O