





1. How many hours are there in 24 days?
(a) 576 hours (b) 567hours (c) 2400 hours (d) 24 hours
2. _____ minutes make 5 hours.
(a) 300 minutes (b) 30 minutes (c) 3000 minutes (d) None of these
3. _____ seconds make 3 hours.
(a) 3600 seconds (b) 10800 seconds (c) 3000 seconds (d) 180 seconds
4. Compare the statement with proper symbol.
1800 seconds 30 minutes
(a)  (b)  (c)  (d) None of these
5. Convert 346 days into weeks and days
(a) 49 weeks 3days (b) 34 weeks 6 days (c) 46 days 3 weeks
6. How many hours are there in the month of February which is not a leap year.
(a) 24 x 30 hours (b) 24 x 29 hours (c) 24 x 28 hours (d) (c) 60 x 28 hours
7. To convert seconds into minutes we _____ by 60.
(a) divide (b) multiply (c) first multiply then divide
8. Convert 40 hours into minutes..
(a) 2400 minutes (b) 240 minutes (c) 4800 minutes
9. In a theatre every 3 hour one show is held. If the first show was at 9:30 am at what time the second show begins
(a) 11:30 am (b) 12:30 am (c) 12:30 pm (d) 2:30 pm
10. 430 seconds = _____ minutes _____ seconds
(a) 43 minutes zero seconds (b) 4 minutes 30 seconds (c) 7 minutes 10 seconds
11. 456 minutes = _____ hours
(a) 18 hours (b) 19 hours (c) 24 hours (d) None of these

B. Match the following conversions.

- | | |
|----------------|-------------------------|
| 1. 5 hours | 365 days |
| 2. 1 year | 1 minute and 40 seconds |
| 3. July | 300 minutes |
| 4. 120 minutes | 2 hours |
| 5. 100 seconds | 49 days |
| 6. 7 weeks | 31 days |

Drag and drop the correct time to the correct picture.





Set alarm for 7:45 AM :)



20 minutes past 5

2'0 clock

20 minutes to 5

23:00

Quarter to 8

22:15

05:15am

quarter past 11

Half past 3

00:00am