

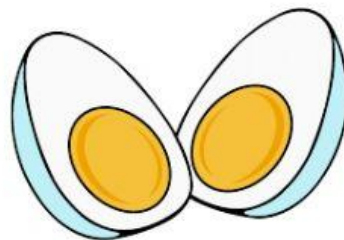
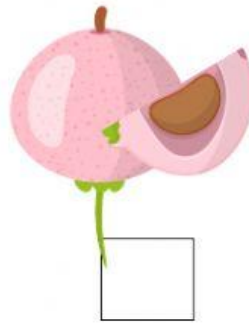



Name: _____ CLASS / NUMB: _____ / _____


MATHS FRACTIONS

Instructions: Berilah tanda centang untuk benda yang menunjukkan 2 bagian sama besar!




MATHS FRACTIONS

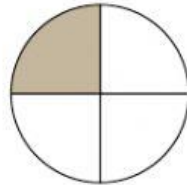
Instructions: Write the fractions that the shaded sections represent for each shape:



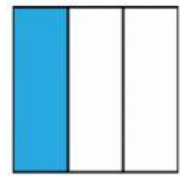
$$\frac{4}{5}$$



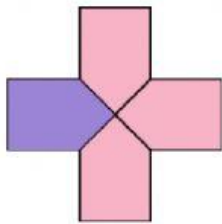
$$\frac{1}{2}$$



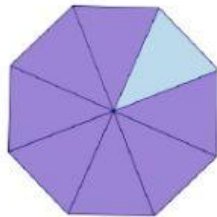
$$\frac{1}{4}$$



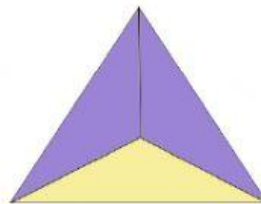
$$\frac{1}{3}$$



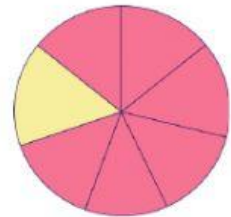
$$\frac{3}{4}$$



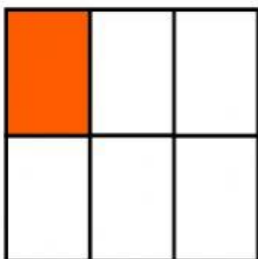
$$\frac{7}{8}$$



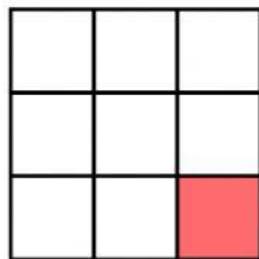
$$\frac{2}{3}$$



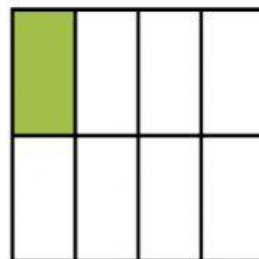
$$\frac{7}{8}$$



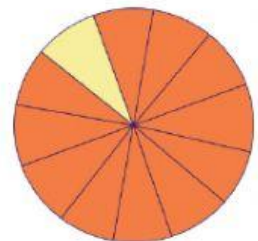
$$\frac{1}{6}$$



$$\frac{1}{9}$$



$$\frac{1}{8}$$



$$\frac{9}{10}$$