

Numbers greater than 1 on a number line

Practice

- 2 Label below the number line with fractions up to the point. The fraction located at the point is _____.



- 3 Identify the fraction located at the point. The fraction located at the point is _____.



- 4 Label the number line to find $\frac{6}{4}$. Place a point on the number line at $\frac{6}{4}$.




- 5 Place a point on the number line at $\frac{15}{8}$.



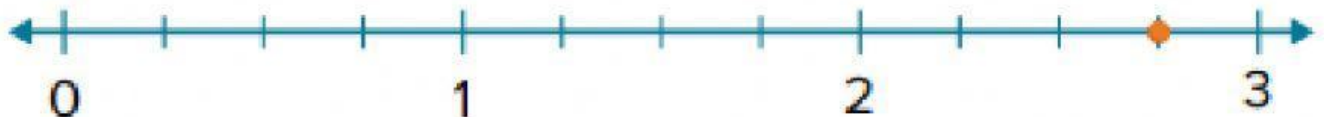
Mixed number on a number line

Practice


- 2 Label below the number line up to the point. The number located at the point is _____.



- 3 Identify the number located at the point. The number located at the point is _____.



- 4 Label the number line to find $1\frac{1}{2}$. Place a point on the number line at $1\frac{1}{2}$.



- 5 Place a point on the number line at $2\frac{2}{4}$.

