













WEEK 27 – TERM 3 – MID-SEMESTER EXAM

Math Review Package

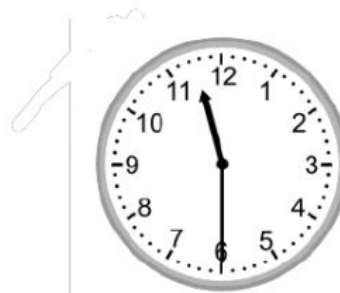
Q1) What time is it? Write the time under the clock.

See Example below.

			
8:00	:	:	:
			
:	:	:	:
			
:	:	:	:

Q2) Drag the clocks and drop in the correct box.

			
1:30	12:30	2:30	11:30
3:30	10:30		



4:30	9:30	5:30	8:30
6:30	7:30		

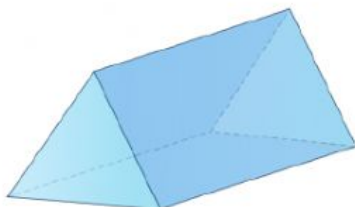
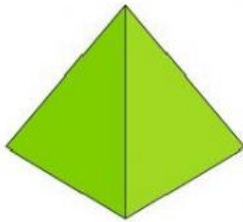
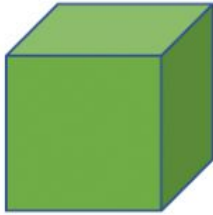



Q3) Complete the table below. Drag and drop the shapes and write down the number of the sides.

2D shapes	Picture	Sides
Square		4
Triangle		
Circle		
Rectangle		
Oval		
Hexagon		
Pentagon		



Q4) Match the 3D shapes with their names.



Triangular Prism

Rectangular Prism

Cube

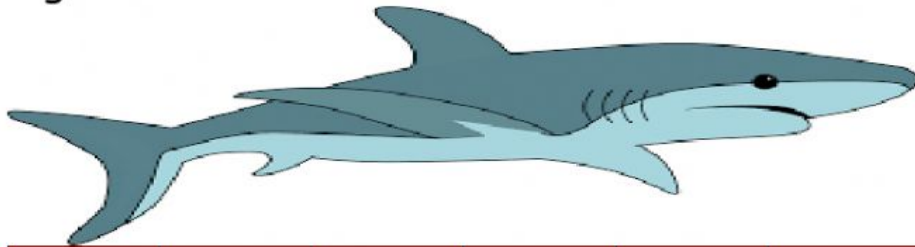
Cylinder

Pyramid


Sphere

Q5) Find the length of the objects below by counting the units below.

E.g.



6 units



..... units



..... units

Q6) Choose the mug that's **half full**.



Q7) Choose the mug that's **full**.

