





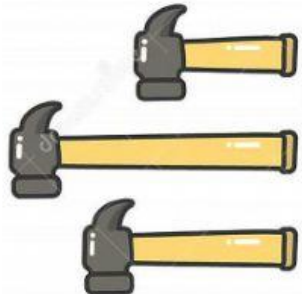





Name:

Class:

Date: / / 2022

WORKSHEET - MATHS REVISION

Exercise 1: Put a tick (✓) in the correct box.


<p>1. Which one is shorter?</p> 	<p>2. Which one is longer?</p> 
<p>3. Which one is the longest?</p> 	<p>4. Which one is the shortest?</p> 
<p>5. Which is the tallest building?</p> 	<p>6. Which is the shortest ice-cream?</p> 
<p>7. Which one is the biggest?</p> 	<p>8. Which is the smallest ball?</p> 

Question 6: What is this?



- A. Point B. Line C. Line segment D. Ray

Question 7: Look at the picture below.



a, Who is the tallest person?

- A. Anna B. Peter C. Will D. Davi

b, Who is the shortest person?

- A. Will B. Peter C. Davi D. Anna

Question 8: Look at the picture below.



a, Who has more ice-creams?

- A. Brad B. Julie

b, How many ice-creams do they have altogether?

- A. $4 + 4 = 8$ B. $3 + 5 = 8$
C. $10 - 2 = 8$ D. $9 - 1 = 8$

Exercise 3: Fill in the blanks.

Question 1: Calculate.

a, 8 plus 2 equals _____

b, 5 minus 1 equals _____

c, 6 minus _____ equals 3

d, _____ plus 4 equals 6

Question 2: Peter has 7 marbles. His father gives him 3 more marbles. How many marbles does Peter have now?

Answer: _____ marbles.