

SOLVING PROBLEMS

1. Here are the months January and February shown on a calendar. Answer these questions about the calendar.

January						
Mo	Tu	We	Th	Fr	Sa	Su
28	29	30	31	1	2	3
4	5	6	7	8	9	10
11	12	13	14	15	16	17
18	19	20	21	22	23	24
25	26	27	28	29	30	31
1	2	3	4	5	6	7

February						
Mo	Tu	We	Th	Fr	Sa	Su
1	2	3	4	5	6	7
8	9	10	11	12	13	14
15	16	17	18	19	20	21
22	23	24	25	26	27	28
29	1	2	3	4	5	6
7	8	9	10	11	12	13

a. Is this year a leap year?

☐ Yes

☐ No

b. How many days would there be in this year?

c. How many days Sundays are there in January?

d. What day is 22nd January?

e. What day is 23rd February?

f. Today is the 19th of January. I am going to the cinema on the 30th of January. How many days is that?

2. Convert these time to 24-hours times:

a. 1:00 pm

d. 8:00 pm



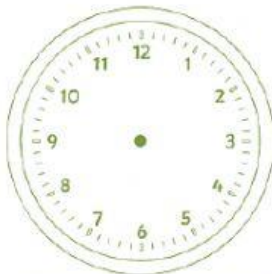

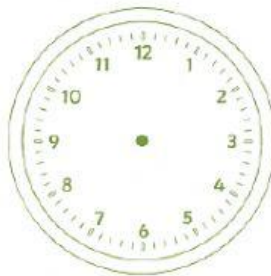


b. 9:00 pm

e. 4:00 pm

c. 7:00 pm

f. 11:00 pm

3. Draw the following times on these clocks faces.



4. Jimmy is going to the zoo. He plans to get a bus at 8 o'clock. It takes 2 hours to get to the zoo. What time will Jimmy get to the zoo?



2 hours

