



**Cambridge Primary Programme**


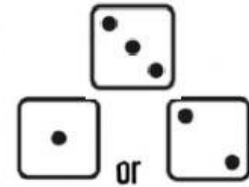
Name: \_\_\_\_\_

Date: \_\_\_\_\_


Class: \_\_\_\_\_



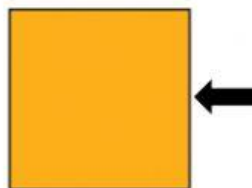
**ROLL AND READ**









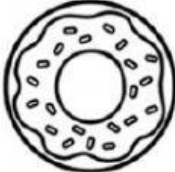


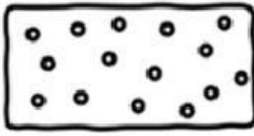














A circle has curved sides.



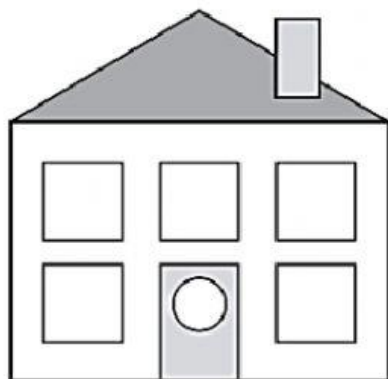
A square has straight sides.



1. Tick the shapes that match their names.

Name	Shapes		
1.  rectangle	 <input type="checkbox"/>	 <input type="checkbox"/>	 <input type="checkbox"/>
2.  triangle	 <input type="checkbox"/>	 <input type="checkbox"/>	 <input type="checkbox"/>
3.  square	 <input type="checkbox"/>	 <input type="checkbox"/>	 <input type="checkbox"/>
4.  hexagon	 <input type="checkbox"/>	 <input type="checkbox"/>	 <input type="checkbox"/>
5.  pentagon	 <input type="checkbox"/>	 <input type="checkbox"/>	 <input type="checkbox"/>
6.  circle	 <input type="checkbox"/>	 <input type="checkbox"/>	 <input type="checkbox"/>

2. Count and write.



How many triangles?



How many squares?



How many rectangles?



How many circles?



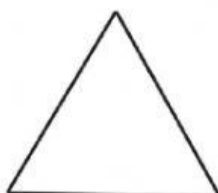
How many pentagons?



How many hexagons?



3. Read and choose.



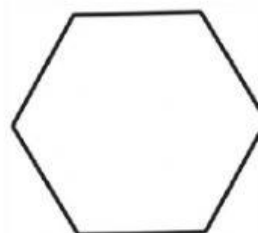
A triangle has \_\_\_\_\_ straight sides.



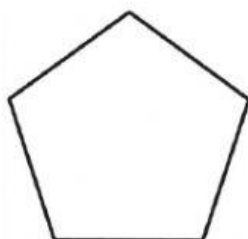
A \_\_\_\_\_ has 2 long sides and 2 short sides.




A square has \_\_\_\_\_ straight sides.



A \_\_\_\_\_ has 6 straight sides.



A pentagon has \_\_\_\_\_ straight sides.



A circle has \_\_\_\_\_ sides.

