

Name: _____

School: _____

Class: _____

Date: _____

Coordinate Plane Quiz

Label the Coordinate Plane using the words from the word bank. (8 pts.)

Quadrant I	origin	x-axis	Quadrants
Quadrant III	Quadrant II	Quadrant IV	y-axis

Key Concept

Coordinate Plane

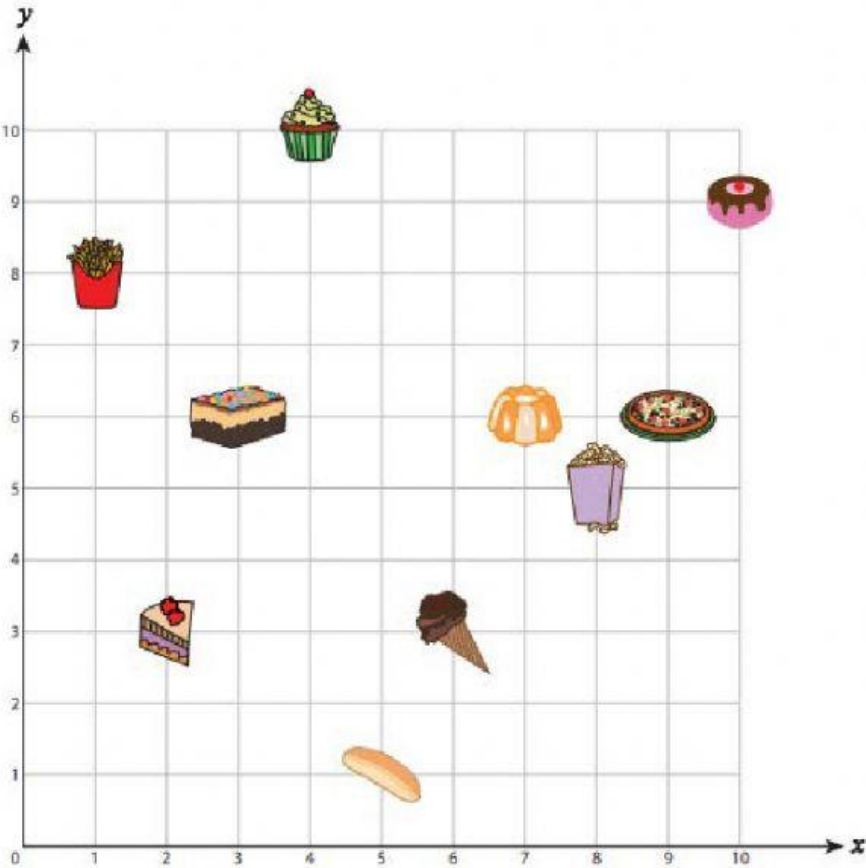
The is the point of intersection of the two number lines.

The is the horizontal number line.






The is the vertical number line.

are four sections of the coordinate plane.

Use the coordinate plane below to complete activity A and B below. (10 pts.)



A) Write the ordered pair for each item.

- 1)  _____
- 2)  _____
- 3)  _____
- 4)  _____
- 5)  _____

B) Write the item located at each ordered pair.

6) (2, 3) _____

7) (4, 10) _____

8) (9, 6) _____

9) (6, 3) _____

10) (8, 5) _____

Draw a quadrant 1 coordinate plane and label it correctly (2pts). Plot the following points on the graph then connect them to make a shape when you have finished plotting all the points. (10 pts.)

(3, 9) (9, 2) (7, 2) (7, 4) (2, 10) (5, 7) (2, 4) (5, 2) (2, 6) (2, 2)