





















Hotdogs pictograph

Data and Graphing Worksheet

Four friends prepared hotdogs for their picnic day.

Number of hotdogs

Tim								
Jane								
Mae								
Ben								

 = 6 hotdog

1. Who prepared 30 hotdogs? _____
2. Who prepared the most hotdogs? _____
3. How many hotdogs did Ben prepare? _____
4. Which 2 friends prepared the same number of hotdogs? _____
5. How many hotdogs were prepared by Mae and Ben **compared to** Jane and Time _____