
























Apple pie sales pictograph

Data and Graphing Worksheet



Jan recorded her apple pie sales for five days.

Number of apple pies sold

				
				
				
				
				
				
Day 1	Day 2	Day 3	Day 4	Day 5

 = 2 apple pies

1. How many apple pies did Jan sell on Day 2? _____
2. What day did she sell 6 pies? _____
3. What day did she sell the most pies? _____
4. What days did she sell the same number of pies? _____
5. How many more pies did she sell on Day 5 than Day 4? _____
6. How many apple pies did she sell on Day 2 and Day 3? _____

