

Year Two
Math Quiz - Unit 11
Mass

Name: _____ Date: _____

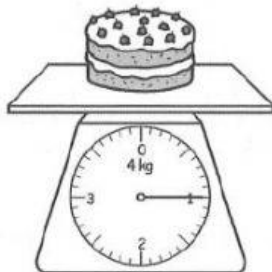
- (1) Fill in the blanks.
Use the words in the box.

more than
tub of yogurt



less than
cake

as heavy as
pear

cake



tub of yogurt

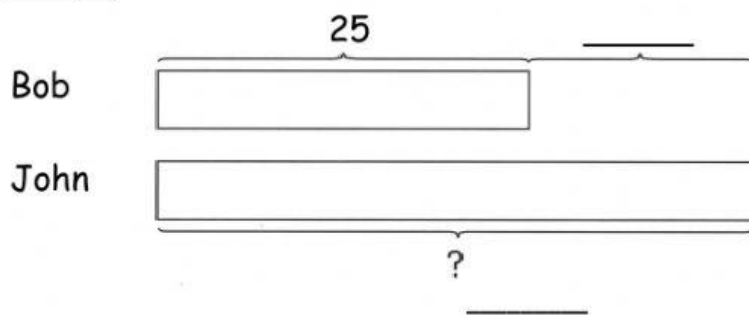


- (a) The cake is _____ 1 kg.
(b) The mass of the pear is _____ 1 kg.
(c) The mass of the tub of yogurt is _____ 1 kg.
(d) The _____ is the lightest.
(e) The _____ is the heaviest.

Read and complete the word problems together with the bar models.
Show your work clearly.

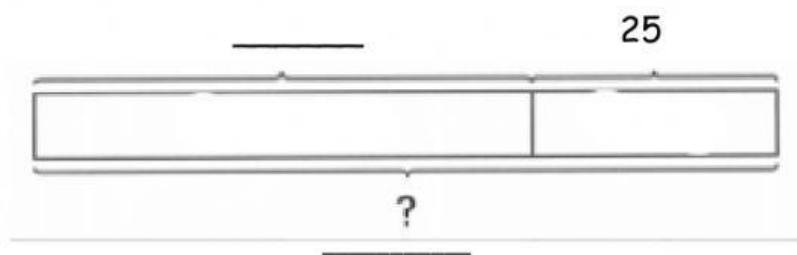
- (2) Bob weighs 25kg.
John weighs 6kg heavier than Bob.
What is their total mass?

Step 1



$$\square \bigcirc \square = \square$$

Step 2



$$\square \bigcirc \square = \square$$

Their total mass is _____ kg.