





Interpreting a Tally Chart 2

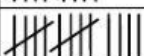
1. Use the chart to answer the question.

Employee modes of transportation to reach the office were surveyed.

Car	Taxi	Bike	Mopeds
			





- What mode of transport do more than 20 employees take?
- How many employees use cars and bike?
- How many more employees use cars than Mopeds?

2. How many people answered the survey below?

Food	Votes
Pizza	
Burger	
Hotdog	
French fries	

3. Use the tally chart to answer the question.





Animals seen in the jungle.

Tiger	Lion	Elephant	Monkey
			

- What kinds of animals have been seen more than 18 times?
- What is the total number of Tigers and Lions in the jungle?
- How many more elephants have seen than monkeys?

4. Use the chart to answer the question.

Beverages Ordered at a Restaurant

Pepsi	Thumps up	Dew	Fanta
			

- What kinds of soft drinks were ordered more than 16 times?
- What is the total number of Pepsi and Thumps up in the restaurant?
- How many more Dews were ordered than Fantas?