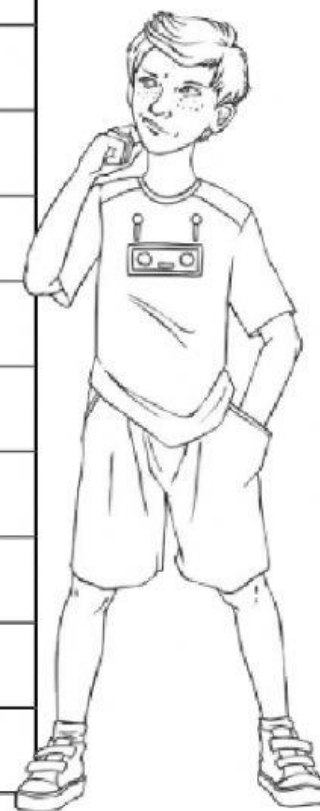


3) Complete this table, filling in the missing times.



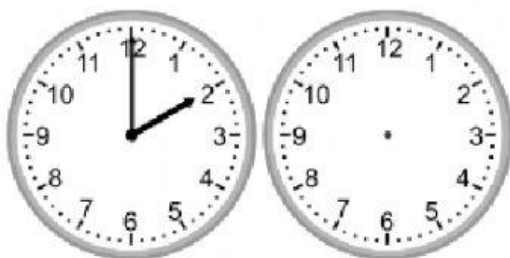
24-Hour Time	12-Hour Time
03:15	
	4:00 p.m.
	7:30 a.m.
18:45	
14:30	
	5:30 a.m.
	10:45 p.m.
17:30	
09:15	
	6:30 a.m.
22:30	




4) Draw the clock hands to show the time it will be

a) What time will it be in 2 hours?

b) What time will it be in 3 hours 30 minutes?





Merryland International School
Department of Mathematics
Grade – 4 (Term-2 WS-9 Time) 2021 – 22

Name: _____

Sec: _____

Converting 12-Hour and 24-Hour Times

I can convert 12-hour times into 24-hour times and vice versa.



- 1) Complete the chart, changing 12-hour a.m. digital times into 24-hour times. 2) Complete the chart, changing 12-hour p.m. digital times into 24-hour times.

12-Hour Time	24-Hour Time	12-Hour Time	24-Hour Time
1:00 a.m.		12:00 p.m.	
2:00 a.m.		1:00 p.m.	
3:00 a.m.		2:00 p.m.	
4:00 a.m.		3:00 p.m.	
5:00 a.m.		4:00 p.m.	
6:00 a.m.		5:00 p.m.	
7:00 a.m.		6:00 p.m.	
8:00 a.m.		7:00 p.m.	
9:00 a.m.		8:00 p.m.	
10:00 a.m.		9:00 p.m.	
11:00 a.m.		10:00 p.m.	