



Name: \_\_\_\_\_

Subject: **M**athematics

### Activity A

**Write the expanded form of the numbers in the pencils.**

a)  =  +  +


b)  =  +


c)  =  +  +




### Activity B

**How many hundreds, tens and ones are in each number?**

d)  =  hundreds  tens  ones

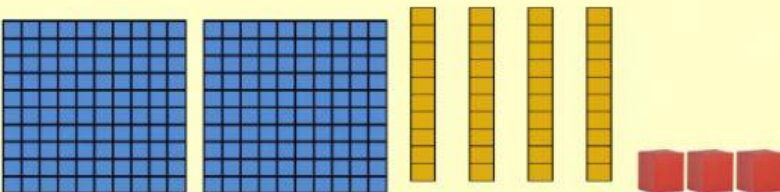
e)  =  hundreds  tens  ones

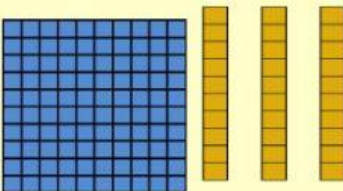
f)  =  hundreds  tens  ones

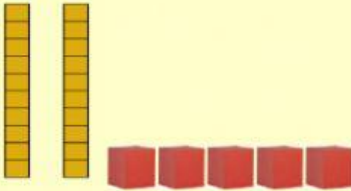



## Activity C

Which number is expanded?

g)   $200 + 40 + 3 = \square$

h)   $100 + 30 = \square$

i)   $20 + 5 = \square$

j)   $300 + 2 = \square$



### Activity D

Solve the problems below.

k) 

H	T	O
5	7	2
+2	1	6
<input type="text"/>	<input type="text"/>	<input type="text"/>

l) 

T	O
	4
+9	3
<input type="text"/>	<input type="text"/>

m) 

T	O
6	2
+3	1
<input type="text"/>	<input type="text"/>


### Activity E

Set out and solve the story problems.

n) Robert collected 356 shells. His brother collected 187 more.

How many shells did they collect altogether?

<input type="text"/>	<input type="text"/>	
<input type="text"/>	<input type="text"/>	<input type="text"/>
+	<input type="text"/>	<input type="text"/>
<hr/>		
<input type="text"/>	<input type="text"/>	<input type="text"/>



o) A man sold 154 apples on Friday and another 319 on Saturday. How many apples did he sell in all on both days?

	<input type="text"/>	
<input type="text"/>	<input type="text"/>	<input type="text"/>
+	<input type="text"/>	<input type="text"/>
<hr/>		
<input type="text"/>	<input type="text"/>	<input type="text"/>