

Name: \_\_\_\_\_

Date: \_\_\_\_\_

Subject: Reading and Comprehension Assessment

Grade: \_\_\_\_\_

Read the passage below then answer the following questions.

Little Bear lived with his mom and dad in a cozy little cave in the woods. He liked to climb trees. He liked to build little houses out of sticks and leaves. Sometimes his whole family would go for a picnic under a big tree beside the river. Picnic days were Little Bear's favorite days!

At bedtime, Little Bear's mom would read him a story. His dad would come in to tell him good night. Little Bear always asked them to leave the bedroom door open a crack. He was just a little bit afraid of the dark.

It was picnic day! They spread out the picnic blanket under the big tree. They had sandwiches and fruit salad. Little Bear climbed the tree, and played in the shallow part of the river.

When it started to get dark, Little Bear's dad helped him catch lightening bugs. They put them in a glass jar that had a few holes punched in the top for air.

That night, Little Bear's mom read him a story. His dad came in to say good night. His dad put the jar of lightening bugs next to Little Bear's bed. They glowed softly in the dark. Little Bear's dad closed the door and smiled. His idea had worked.

1. What is the story mostly about?
  - a) Little Bear being afraid of the dark
  - b) Little Bear likes to climb trees
  - c) Little Bear lives in a cozy little, cave
  
2. Who are the members of Little Bear's family?
  - a) bugs and bears
  - b) mom and dad
  - c) sandwiches
  
3. What did Little Bear's father help him catch?
  - a) sticks
  - b) leaves
  - c) lightening bugs

4. In which part of the river did Little Bear play?

- a) shallow
- b) deep
- c) dark

5. What are other objects that can be used to build houses?

- a) \_\_\_\_\_
- b) \_\_\_\_\_

6. What is the second day of the week? \_\_\_\_\_

7. What day comes just after Saturday? \_\_\_\_\_

8. What is the last month of the year? \_\_\_\_\_

9. What month comes just after June? \_\_\_\_\_

Use the calendar below to answer the following questions.

General  
Blue

October 2022

Jamaica

Sunday	Monday	Tuesday	Wednesday	Thursday	Friday	Saturday
						1
2	3	4	5	6	7	8
9	10	11	12	13	14	15
16	17 National Heroes Day	18	19	20	21	22
23	24	25	26	27	28	29
30	31					

10. What is the **date for the first Saturday** of October 2022?

- a) Saturday, October 1<sup>st</sup>, 2022
- b) Monday, October 24<sup>th</sup>, 2022
- c) Saturday, October 15<sup>th</sup>, 2022

11. What is the **date for the third Wednesday** of October 2022?

- a) Sunday, October 16<sup>th</sup>, 2022
- b) Wednesday, October 26<sup>th</sup>, 2022
- c) Wednesday, October 19<sup>th</sup>, 2022

12. What **day of the week** is October 29<sup>th</sup>, 2022?

- a) Monday
- b) Saturday
- c) Friday

13. What **day of the week** is the last day of October 2022?

- a) Tuesday, October 11<sup>th</sup>, 2022
- b) Thursday
- c) Monday

14. What is the **date for National Heroes Day**?

- a) Monday October 24<sup>th</sup>, 2022
- b) Thursday, October 20<sup>th</sup>, 2022
- c) Monday, October 17<sup>th</sup>, 2022

15. Write the **date for the last day of October 2022**.

---

16. Today's date is Friday, October 28<sup>th</sup>, 2022. What will be tomorrow's date?






- a) Thursday, October 27<sup>th</sup>, 2022
- b) Wednesday, October 26<sup>th</sup>, 2022
- c) Saturday, October 29<sup>th</sup>, 2022

17. Khaison had swimming lessons from October 9<sup>th</sup>, 2022, to October 19<sup>th</sup>, 2022.

How long did Khasion have swimming lessons?

- a) 1 week
- b) 1 week 4 days
- c) 3 weeks

The tally chart shows the insects that Sally saw at the park. Complete the tally chart. Count the tally marks then write the correct number in the Total column.

Insects	Tally	Total
 spider		<input type="text"/>
 ant		<input type="text"/>
 snail		<input type="text"/>
 butterfly		<input type="text"/>
 bee		<input type="text"/>

18. How many ants did Sally see?

- a) 22
- b) 18
- c) 3

19. How many butterflies did Sally see?

- a) 6
- b) 22
- c) 12

20. Which insect did Sally see the most?

- a) bee
- b) ant
- c) snail

21. Which insect did Sally see the least?

- a) spider
- b) butterfly
- c) snail

22. Sally saw \_\_\_\_\_ more bees than snail.

a) 5

b) 3

c) 8

23. Sally saw \_\_\_\_\_ fewer butterflies than spiders.

24. Sally saw \_\_\_\_\_ fewer snails than butterflies.