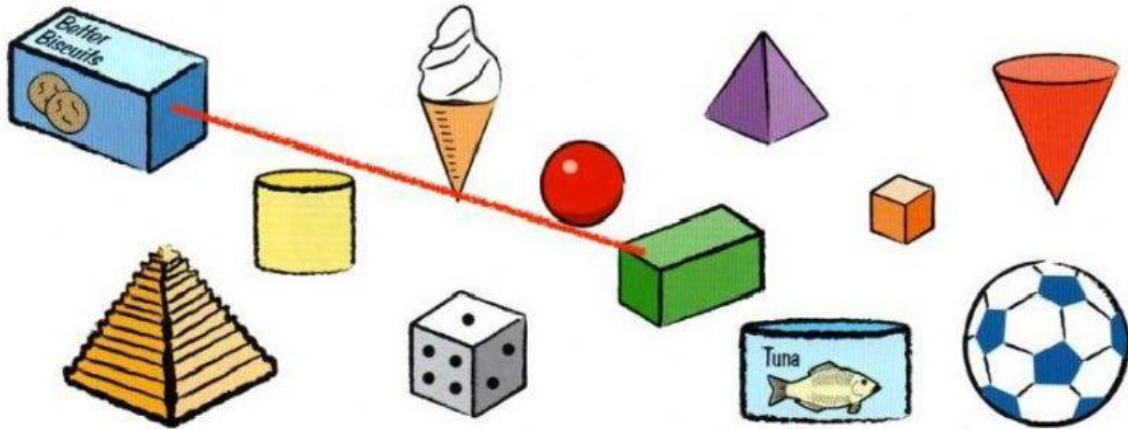


Grade 3


Activity worksheet (level -1)



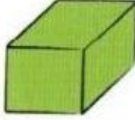


Solid Shapes

1. Match the shapes that are the same:







2. Count the shapes:



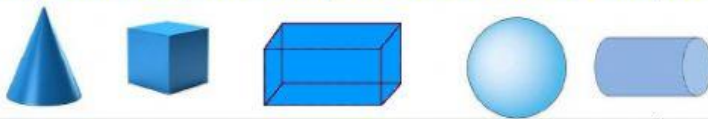
- a) 
- b) 
- c) 
- d) 
- e) 

Activity worksheet (level -2)

Properties of 3D Shapes

	Sphere	Cube	Cone	Cylinder
				
Faces				
Edges				
Vertices				

Drag and drop the shape next to its description



This shape has 2 faces	
This shape has 3 faces	
This shape has 6 equal faces	
This shape has 12 edges	
This shape has 0 vertices and 0 edges	

Activity worksheet (level -3)

Click on the name of each shape and fill in the blanks

cone

cube

sphere



faces: _____


edges: _____

vertices: _____

cylinder

cone

cube



faces: _____

edges: _____

vertices: _____

rectangular
prism

sphere

cube



faces: _____

edges: _____

vertices: _____

cube

sphere

cylinder



faces: _____

edges: _____

vertices: _____

pyramid

cylinder

cube



faces: _____

edges: _____

vertices: _____

cone

rectangular
prism

pyramid



faces: _____

edges: _____

vertices: _____

