


Unit 3 statistics (3)

Complete the answers in the blank. 

⑥ The data set is 10, 22, 17, 19, 35, 15, 25, and 29.

Find Q_1

Position of Q_1 =

Q_1 =

Find D_4

Position of D_4 =

D_4 =

Find Q_3


Position of Q_3 =

Q_3 =

Find P_{10}

Position of P_{10} =

P_{10} =

⑦ The data set is 2, 7, 5, 20, 4, 7, 9, and 11. 

Find D_5

Position of D_5 =

D_5 =

Find D_2

Position of D_2 =

D_2 =

Find Q_1


Position of Q_1 =

Q_1 =


Find P_{40}

Position of P_{40} =

P_{40} =



Unit 3 statistics (3)

Complete the answers in the blank. 

1. { 3, 5, 10, 8, 7, 6, 4, 3, 2, 3 }

Minimum :

Maximum :

Mean :

Median :

Mode :

Range :

2. { 1, 10, 8, 4, 5, 2, 1, 4, 1, 6 }

Minimum :

Maximum :

Mean :

Median :

Mode :

Range :

Name No M . 3 /

