




Sarasas Witaed Ekkachai School

Name: KG 2/ No:

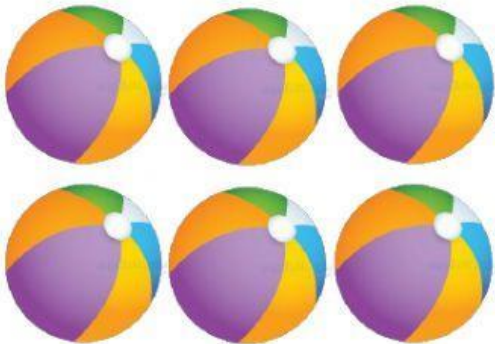
Direction: Complete the addition below.




$$3 + 2 = \square$$



$$2 + 1 = \square$$



$$3 + 3 = \square$$



$$2 + 2 = \square$$