







Name: _____

Grade: 1/_____

Subject: Mathematics

Student No: _____

Directions: Use the pictogram to answer the questions.

Favourite Food	
Pizza	
Burger	
Hot dog	
French fries	

Key: 1 = 1 student

1. How many students like burger? _____
2. How many students like pizza and hot dogs? _____
3. How many more students like hot dog than burger? _____
4. Which food do students like the most? _____
5. Which food do students like the least? _____