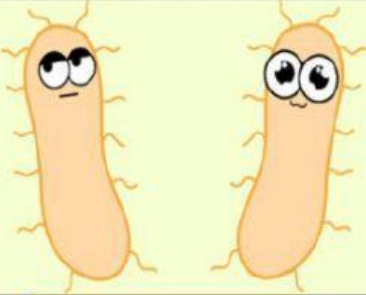
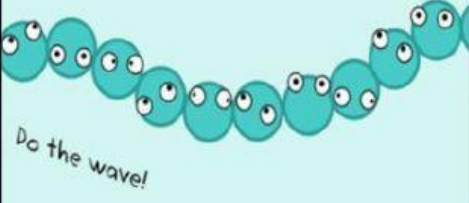








Kingdom of the Living things







1. Complete the chart below about the Six kingdoms.

The 6 Kingdoms

| | | |
|---|---|---|
| Archaeobacteria Prokaryote | E _____ Prokaryote | P _____ Eukaryote |
|  |  |  |
| F _____ | P _____ | A _____ |
|  |  |  |



2. Complete the table about the characteristics used to classify living things into the six different kingdoms.

| Write the <u>Characteristic</u> | <u>Complete the Description</u> of each characteristic |
|---|--|
|  Cell type | (the genetic material is surrounded by a membrane) or (lacking a membrane) |
|  <input type="text"/> | (having only one cell) or (having two or more cells). |
|  <input type="text"/> | (being able to move) or (not being able to move) |
|  <input type="text"/> | (makes its own food) or (feeds on other living things) |
|  <input type="text"/> | S..... and A..... reproduction |
|  <input type="text"/> | (needs oxygen) or (does not use oxygen). |

3. Drag and drop the words into their correct spot within the statement below that answers the following question:

- What kind of living things are part of the Animal Kingdom?

The ones that are multi-....., hetero..... ryotes with respiration, reproduction and the ability to.....

move

celled

euka

aerobic

trophic

sexual