
















Assignment 38

Smart Charts

1. The pictograph given below represents the number of books issued by the school library :



stands for 10 books issued.





















Monday	  
Tuesday	 
Wednesday	  
Thursday	     
Friday	

Answer the following questions :

- How many books were issued on Tuesday? _____
- How many books were issued on Friday? _____
- On which two days the same number of books were issued? _____ and _____
- On which day highest number of books were issued? _____
- Find the total number of books issued during the week? _____

2. The following pictograph shows the number of students speaking English, Hindi, Punjabi, Urdu, Bengali and Assamese :

Here, one  stands for 5 students.

English	      
Hindi	    
Punjabi	  
Urdu	
Bengali	 
Assamese	 

Answer the following questions :


- Which language is spoken by maximum number of students? _____
- Which language is spoken by minimum number of students? _____
- How many students speak English? _____
- How many students speak Hindi? _____














Rough Work

Date :

Teacher's Signature :

Smart Charts

1. The following pictograph shows the number of cows in five villages A, B, C, D and E. Here  stands for 10 cows.

Village A	  
Village B	 
Village C	   
Village D	  
Village E	

Answer the following questions :

- Which village has 20 cows?

- Which village has the maximum number of cows?


- Which village has the minimum number of cows?

- How many cows, in all, are there in five villages?

Rough Work

Assignment 39

2. The following pictograph shows the number of students of a class who play cricket, football, tennis or hockey. Read the pictograph and answer the questions.

One  stands for 2 students.

Cricket	    
Football	   
Tennis	 
Hockey	  

Answer the following questions :

- Which game is played by the least number of students?

- Which game is played by the maximum number of students?

- How many students play cricket?

- How many students play hockey?

Date :

Teacher's Signature :