



# UNIT 8: LINES AND ANGLES

## Lesson 1: Lines

### I. Vocabulary

English words	Vietnamese meaning
Line	Đường thẳng
Line segment	Đoạn thẳng
Parallel lines	Đường thẳng song song
Perpendicular lines	Đường thẳng vuông góc
Intersecting lines	Hai đường thẳng cắt nhau

### II. Practice

1. Here are 3 pairs of lines.



Pair 1



Pair 2



Pair 3

Complete the sentences.

a. Pair \_\_\_\_\_ are perpendicular lines.

b. Pair \_\_\_\_\_ are parallel lines.

2. Which line segments in these figures are parallel? Which are perpendicular?  
Which are intersecting?


Write *perpendicular*, *parallel* or *intersecting* for each sentence below.

a. Line segments AB and BC are

.....

Line segments AD and AB are

.....



b. Line segments EH and FG are

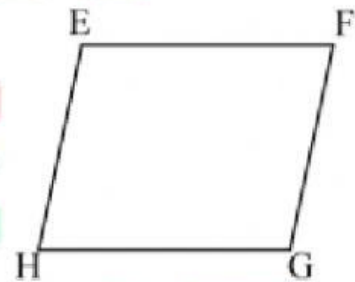
.....

Line segments EF and HG are

.....

Line segments EH and EF are

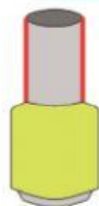
.....



3. Identify the highlighted pairs of lines as parallel or perpendicular in each object.

a. parallel lines

b. \_\_\_\_\_



c. \_\_\_\_\_

d. \_\_\_\_\_

